

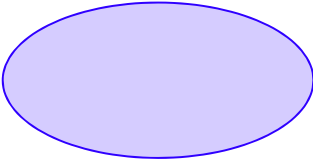
# Class 1 Maths

## Mock Paper

---

Choose correct answer(s) from the given choices

(1) How many corners does an oval have?



a. 4

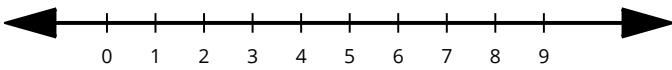
b. 0

c. 8

d. 5

(2) Look at the number line given below and choose the correct option.

4  9



< > =

(3) Add:

$$\begin{array}{r} 24 \\ + 64 \\ \hline \\ \hline \end{array}$$

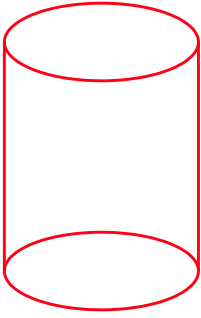
a. 86

b. 89

c. 88

d. 87

(4) How many edges does a cylinder have?



- a. 1
- b. 4
- c. 6
- d. 2

(5) Identify the shape.

- a. Sphere
- b. Cone
- c. Cylinder
- d. Cube

(6) The numbers 86, 28, 70, 56, 23 and 35 in the descending order are written as:

- a.  $86 < 70 < 56 < 35 < 28 < 23$
- b.  $86 > 70 > 56 > 35 > 28 > 23$
- c.  $86 < 56 < 70 < 35 < 28 < 23$
- d.  $86 > 56 > 70 > 35 > 28 > 23$

### Fill in the blanks

(7) Subtract:

$$\begin{array}{r} 62 \\ - 39 \\ \hline \\ \hline \end{array}$$

### Answer the questions

- (8) The number that comes between 7 and 9 is \_\_\_\_\_.
  - (9) Which month comes after July?
-

(10) What comes next?

